



9.2 การลบโดยใช้ Number Bonds

กากบาทรูปสี่เหลี่ยมแสดงการลบและเติมคำตอบลงในช่องว่างให้ถูกต้อง

ตัวอย่าง

$15 - 3 = 12$

□□□□□ □□~~□□□~~

□□□□□

(1)

$18 - 6 = \square$

□□□□□ □□□□□

□□□□□ □□□

(2)

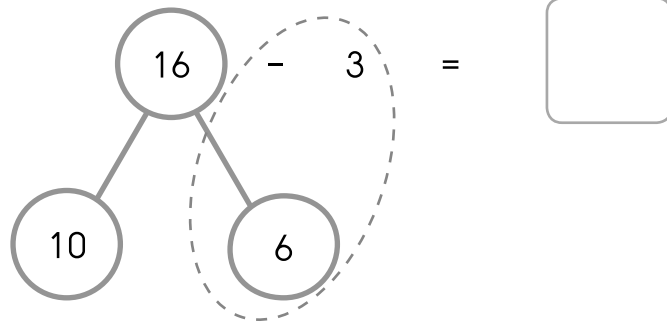
$17 - 2 = \square$

□□□□□ □□□□□

□□□□□ □□

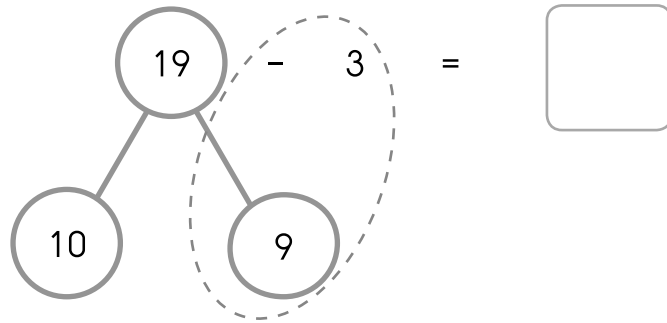


(3)



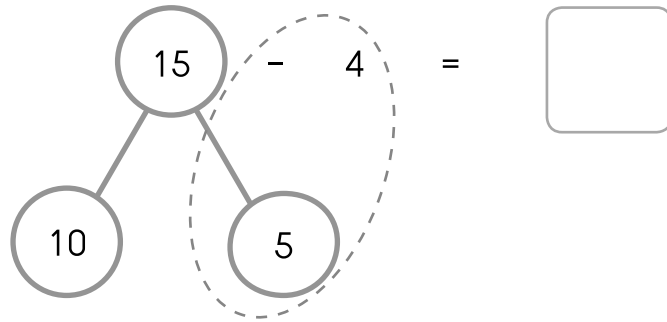
□□□□□	□□□□□
□□□□□	□

(4)



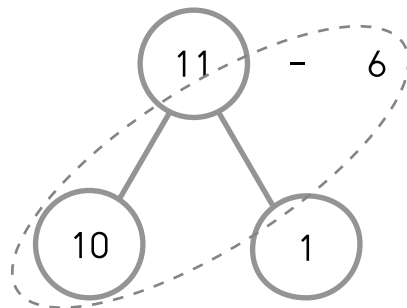
□□□□□	□□□□□
□□□□□	□□□□

(5)



□□□□□	□□□□□
□□□□□	

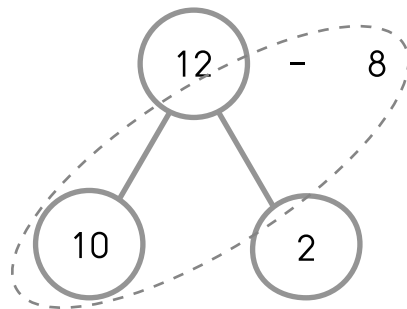
(6)



=

□	□	□	□	□	□
□	□	□	□	□	□

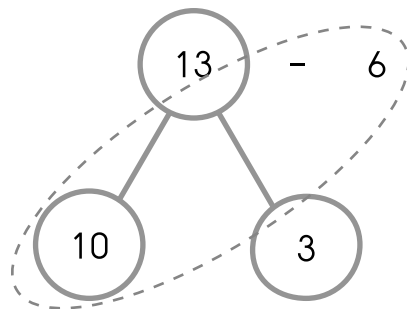
(7)



=

□	□	□	□	□	□	□
□	□	□	□	□	□	□

(8)

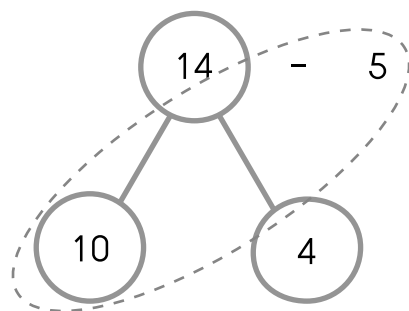


=

□	□	□	□	□	□	□	□
□	□	□	□	□	□	□	□



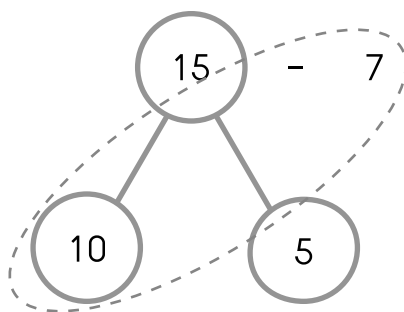
(9)



=

□□□□□ □□□□
□□□□□

(10)

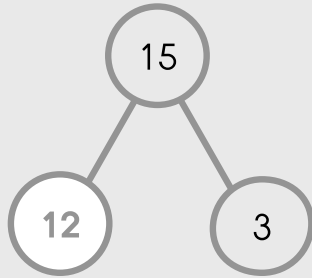


=

□□□□□ □□□□□
□□□□□

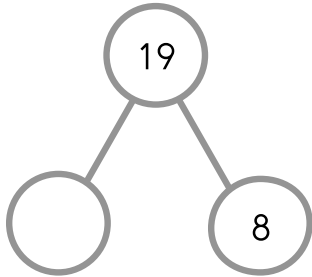
เติมคำตอบลงในช่องว่างให้ถูกต้อง

ตัวอย่าง



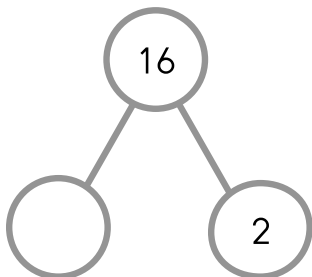
$$15 - \boxed{12} = 3$$

(1)



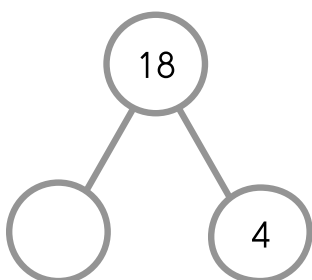
$$19 - \boxed{} = 8$$

(2)



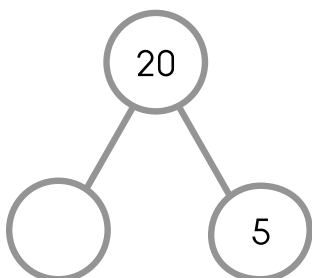
$$16 - \boxed{} = 2$$

(3)



$$18 - \boxed{} = 4$$

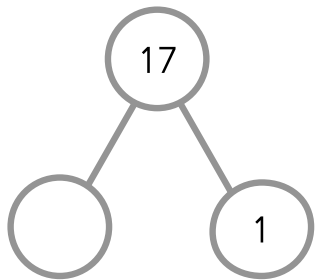
(4)



$$20 - \boxed{} = 5$$

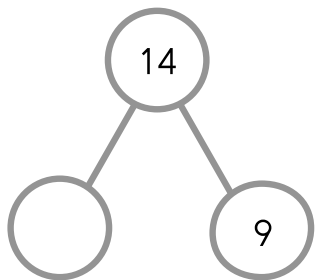


(5)



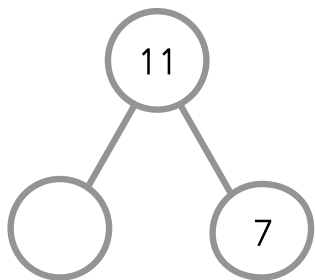
$$17 - \square = 1$$

(6)



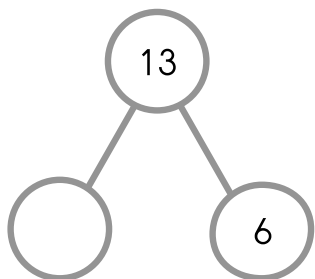
$$14 - \square = 9$$

(7)



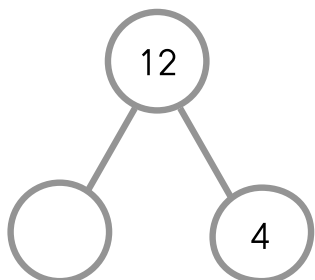
$$11 - \square = 7$$

(8)



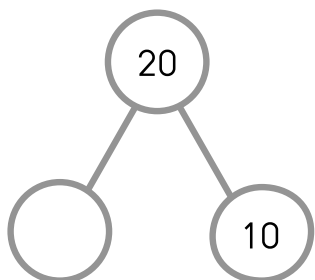
$$13 - \square = 6$$

(9)



$$12 - \square = 4$$

(10)



$$20 - \square = 10$$