




### 3.3 การบวกเลขแนวตั้ง

เติมคำตอบลงในช่องว่างให้ถูกต้อง

ตัวอย่าง

The example shows 4 oranges in a top row and 2 apples in a bottom row. An arrow points to a vertical addition box containing the numbers 4, 2, and 6. The 4 and 2 are in separate boxes, with a plus sign to the right. The 6 is at the bottom, underlined twice.

(1)





A vertical addition box with two empty boxes for the numbers, a plus sign to the right, and a space for the answer at the bottom, underlined twice.

(2)

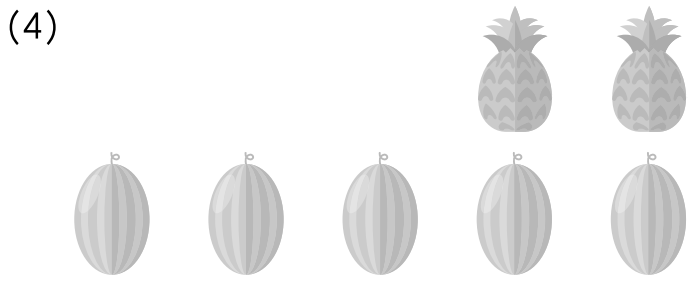


A vertical addition box with two empty boxes for the numbers, a plus sign to the right, and a space for the answer at the bottom, underlined twice.






<input type="text"/>	+
<input type="text"/>	
<hr/>	
<hr/>	



<input type="text"/>	+
<input type="text"/>	
<hr/>	
<hr/>	



<input type="text"/>	+
<input type="text"/>	
<hr/>	
<hr/>	

เติมคำตอบลงในช่องว่างให้ถูกต้อง

ตัวอย่าง

3  
+  
2  

---

5

(1) →   
  

---

(2) →   
  


---

(3) →   
  

---




(4)



→

	+	
	+	
<hr style="border: 0; border-top: 1px solid black; width: 100%;"/>		
<hr style="border: 0; border-top: 3px double black; width: 100%;"/>		


ตัวอย่าง



→

1	+	
2	+	
3	+	
<hr style="border: 0; border-top: 1px solid black; width: 100%;"/>		
<hr style="border: 0; border-top: 3px double black; width: 100%;"/>		

(5)



→

	+	
	+	
	+	
<hr style="border: 0; border-top: 1px solid black; width: 100%;"/>		
<hr style="border: 0; border-top: 3px double black; width: 100%;"/>		

(6)



+  
  
 +



(7)



+  
  
 +



(8)



+  
  
 +





แสดงวิธีทำและเติมคำตอบลงในช่องว่างให้ถูกต้อง

**ตัวอย่าง**

$$3 + 2 = \boxed{5}$$

$$\begin{array}{r} 3 \\ + 2 \\ \hline 5 \end{array}$$

(1)  $4 + 2 = \boxed{\phantom{00}}$

(2)  $4 + 4 = \boxed{\phantom{00}}$

(3)  $1 + 6 = \boxed{\phantom{00}}$

(4)  $4 + 5 = \boxed{\phantom{00}}$

(5)  $5 + 5 = \boxed{\phantom{00}}$

(6)  $3 + \boxed{\phantom{00}} = 6$

(7)  $7 + \boxed{\phantom{00}} = 9$