

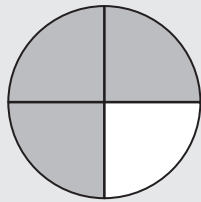


15.3 การเปรียบเทียบและเรียงลำดับเศษส่วน

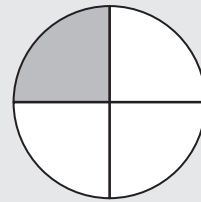
แบบที่ 1 : เปรียบเทียบส่วนเท่ากัน

เติมเครื่องหมาย $>$, $<$ หรือ $=$ ลงในช่องว่างให้ถูกต้อง

ตัวอย่าง

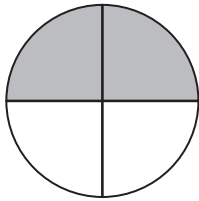


$\frac{3}{4}$

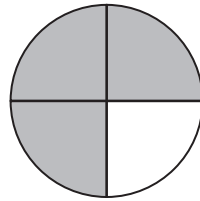



$\frac{1}{4}$

(1)



$\frac{2}{4}$

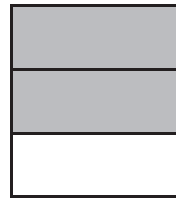



$\frac{3}{4}$

(2)

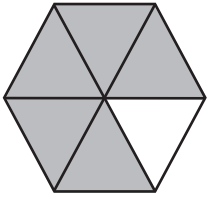


$\frac{1}{3}$

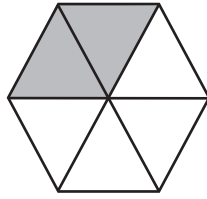



$\frac{2}{3}$

(3)

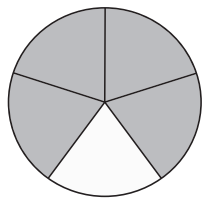


$$\frac{5}{6}$$

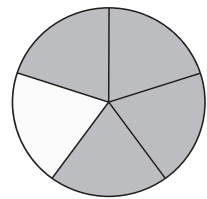



$$\frac{2}{6}$$

(4)




$$\frac{4}{5}$$

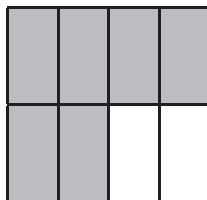



$$\frac{4}{5}$$

(5)



$$\frac{3}{8}$$



$$\frac{5}{8}$$




แบบที่ 2 : เปรียบเทียบเศษเท่ากัน

เติมเครื่องหมาย $>$, $<$ หรือ $=$ ลงในช่องว่างให้ถูกต้อง

ตัวอย่าง

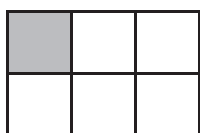


$\frac{1}{2}$

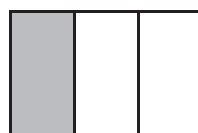



$\frac{1}{4}$

(1)

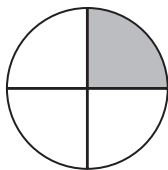


$\frac{1}{6}$

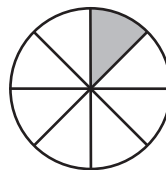



$\frac{1}{3}$

(2)

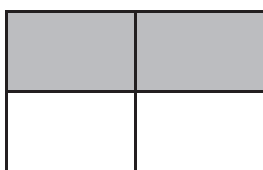


$\frac{1}{4}$

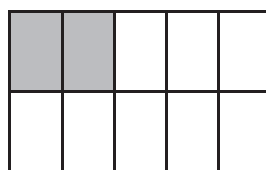



$\frac{1}{8}$

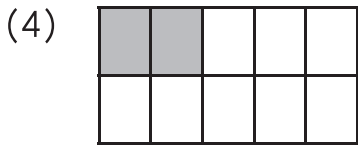
(3)




$\frac{2}{4}$



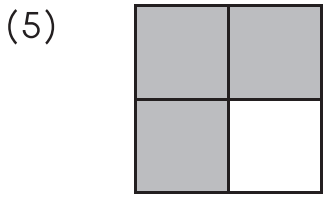
$\frac{2}{10}$



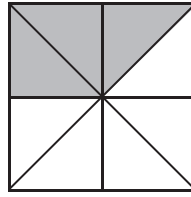

$$\frac{2}{10}$$



$$\frac{2}{3}$$



$$\frac{3}{4}$$

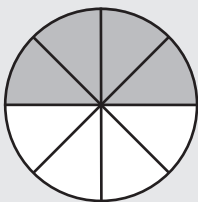


$$\frac{3}{8}$$

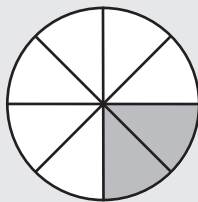
การเรียงลำดับเศษส่วน

เรียงลำดับเศษส่วนจากน้อยที่สุดไปมากที่สุด

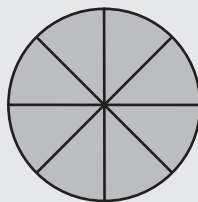
ตัวอย่าง



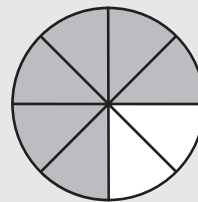
$$\frac{4}{8}$$



$$\frac{2}{8}$$



$$1$$



$$\frac{6}{8}$$

$$\frac{2}{8}$$

$$\frac{4}{8}$$

$$\frac{6}{8}$$

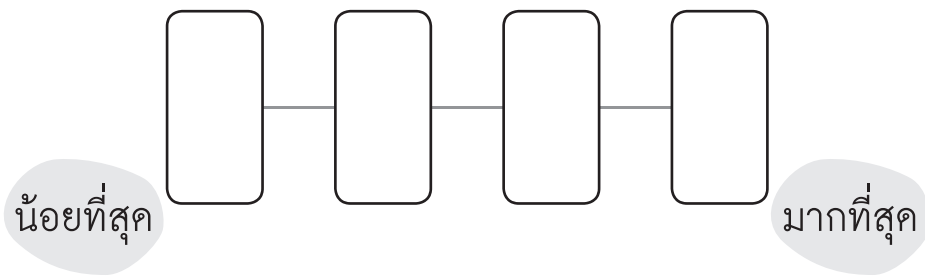
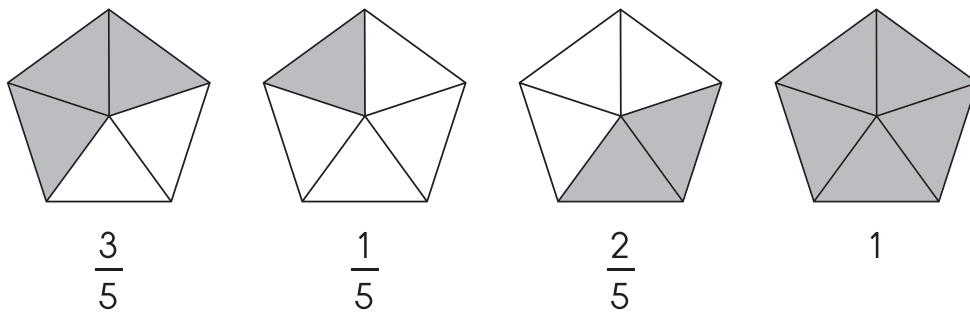
$$1$$

น้อยที่สุด

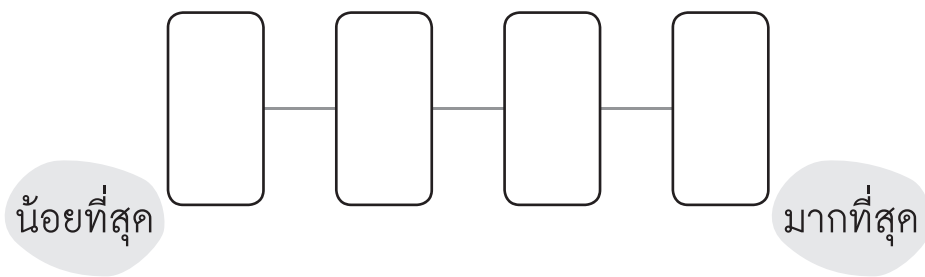
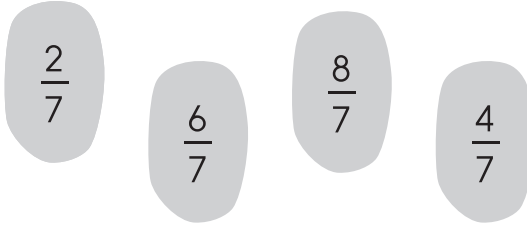
มากที่สุด



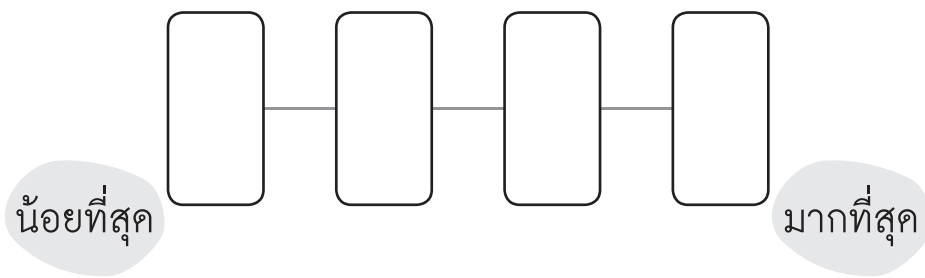
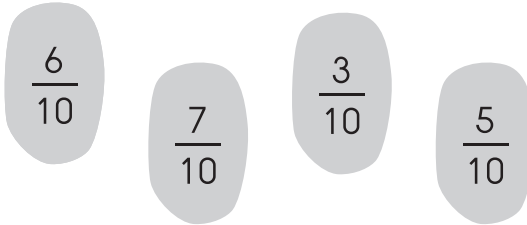
(1)



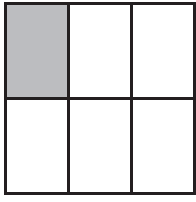
(2)




(3)




(4)



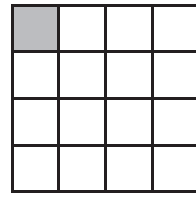
$$\frac{1}{6}$$



$$\frac{1}{8}$$

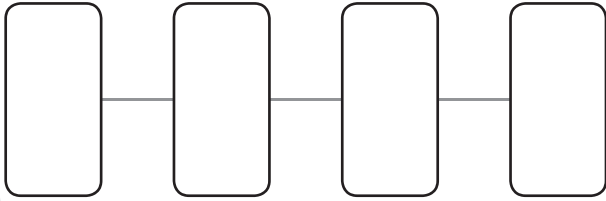


$$\frac{1}{4}$$



$$\frac{1}{16}$$

น้อยที่สุด



มากที่สุด

(5)



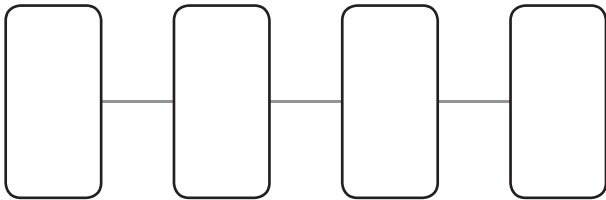
$$\frac{2}{7}$$

$$\frac{2}{20}$$

$$\frac{2}{3}$$

$$\frac{2}{5}$$

น้อยที่สุด



มากที่สุด




เรียงลำดับเศษส่วนจากมากที่สุดไปน้อยที่สุด

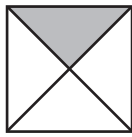
ตัวอย่าง

มากที่สุด $\frac{3}{5}$ — $\frac{3}{10}$ — $\frac{3}{50}$ — $\frac{3}{100}$ น้อยที่สุด

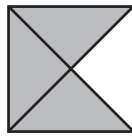
(1)



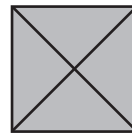
$\frac{2}{4}$



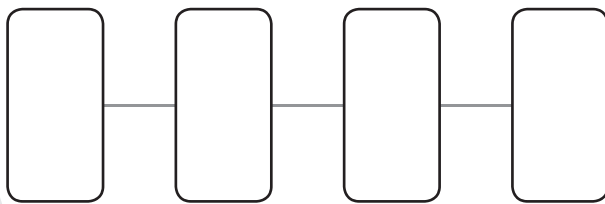
$\frac{1}{4}$



$\frac{3}{4}$



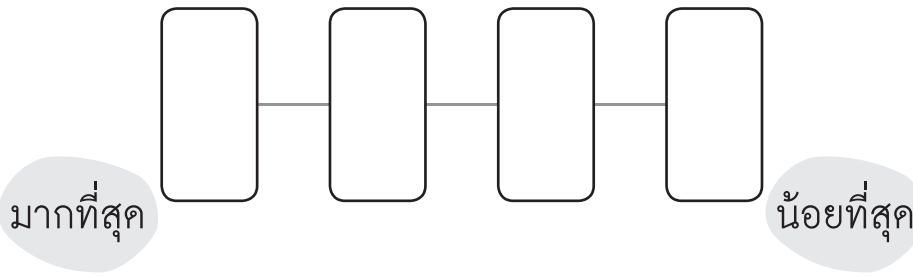

1



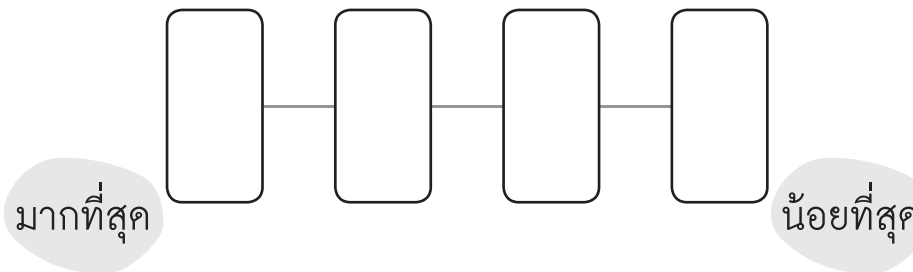
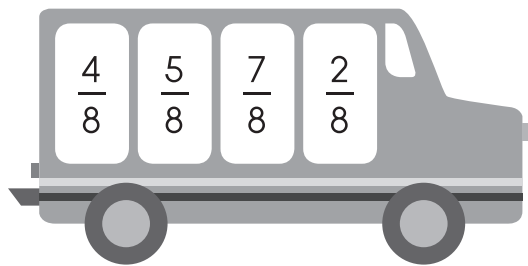
มากที่สุด

น้อยที่สุด

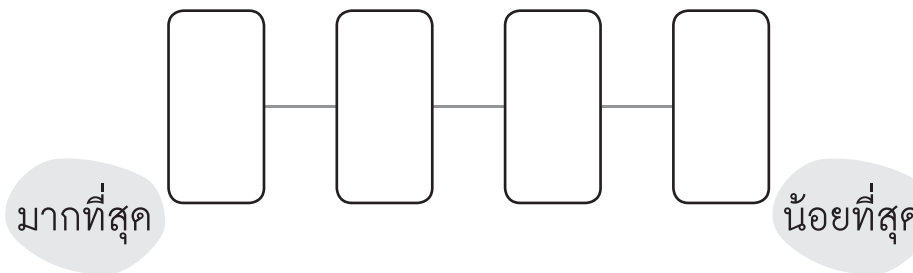
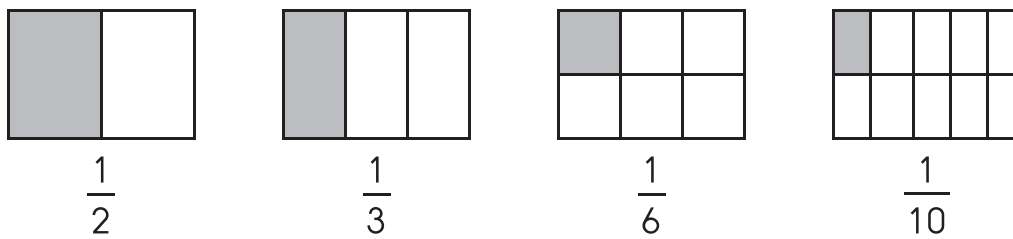
(2)



(3)



(4)





(5)

