

8

การคูณ (ตอนที่ 3)

8.1) สูตรคูณแม่ 8 และ 9


เติมคำตอบลงในช่องว่างให้ถูกต้อง

ตัวอย่าง




$$2 \times 8 = \boxed{16}$$

(1)




$$3 \times 8 = \boxed{}$$

(2)



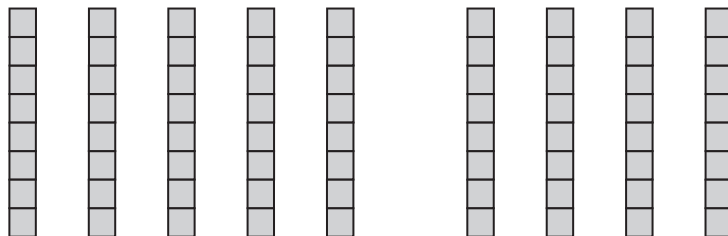
$$4 \times 8 = \square$$

(3)



$$6 \times 8 = \square$$

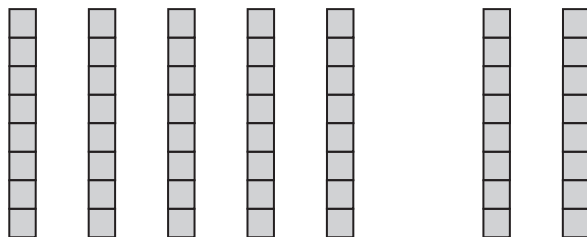
(4)



$$9 \times 8 = \square$$




(5)



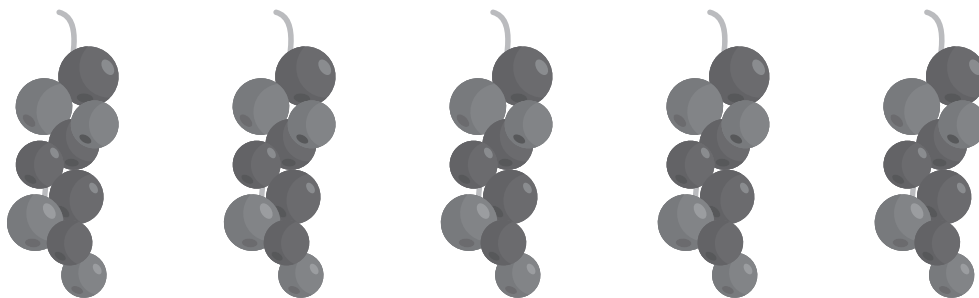
$$7 \times 8 =$$

(6)



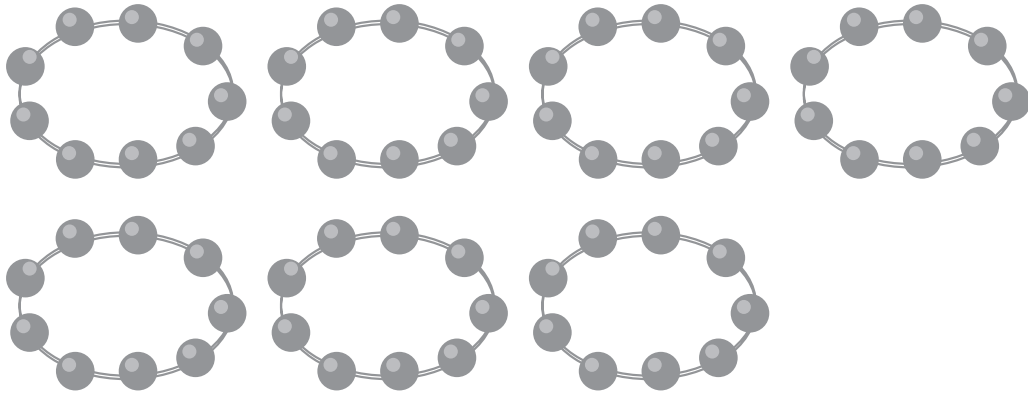
$$2 \times 9 =$$

(7)



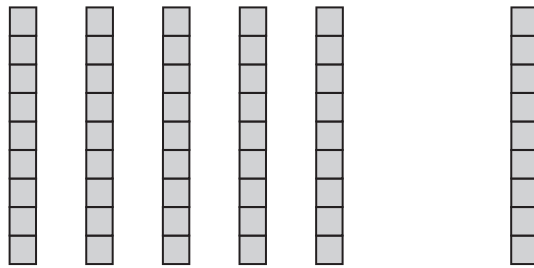
$$5 \times 9 =$$

(8)



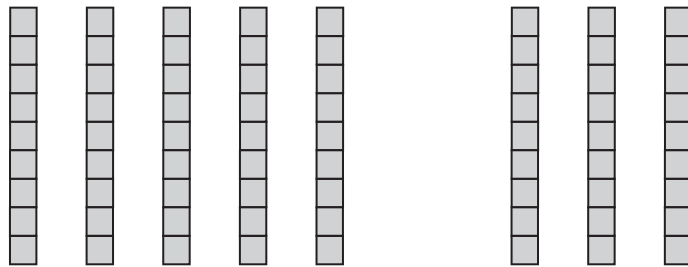
$$7 \times 9 =$$

(9)



$$6 \times 9 =$$

(10)

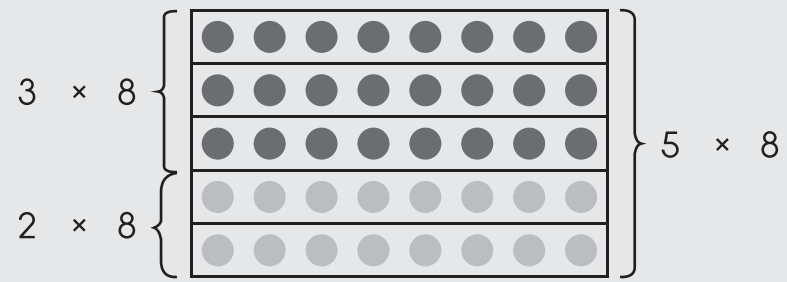


$$8 \times 9 =$$



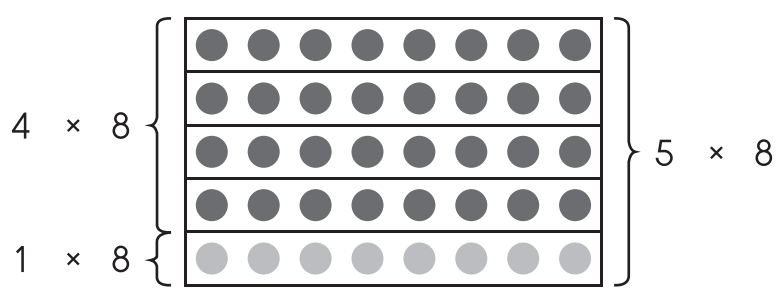
เติมคำตอบลงในช่องว่างให้ถูกต้อง

ตัวอย่าง




$$\begin{aligned}
 3 \times 8 &= 5 \times 8 - 3 \times 8 \\
 &= 40 - 24 \\
 &= 24
 \end{aligned}$$

(1)



$$\begin{aligned}
 4 \times 8 &= \square - \square \\
 &= \square - \square \\
 &= \square
 \end{aligned}$$

(2)




$$6 \times 8 = \square + \square$$

$$= \square + \square$$

$$= \square$$

(3)




$$7 \times 8 = \square + \square$$

$$= \square + \square$$

$$= \square$$




(4)



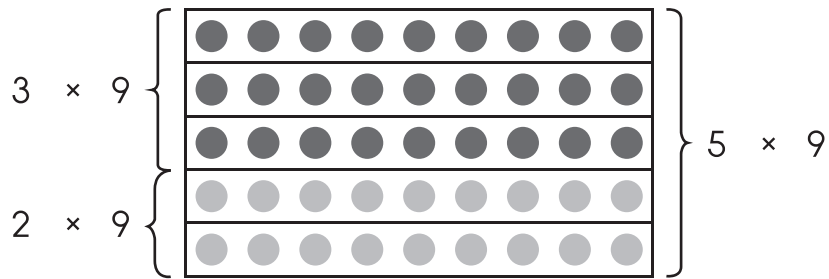
$$\begin{aligned} 8 \times 8 &= \square - \square \\ &= \square - \square \\ &= \square \end{aligned}$$

(5)




$$\begin{aligned} 9 \times 8 &= \square - \square \\ &= \square - \square \\ &= \square \end{aligned}$$

(6)



$$\begin{aligned} 3 \times 9 &= \square - \square \\ &= \square - \square \\ &= \square \end{aligned}$$


(7)



$$\begin{aligned} 4 \times 9 &= \square - \square \\ &= \square - \square \\ &= \square \end{aligned}$$




(8)




$$\begin{aligned} 6 \times 9 &= \square + \square \\ &= \square + \square \\ &= \square \end{aligned}$$

(9)



$$\begin{aligned} 7 \times 9 &= \square + \square \\ &= \square + \square \\ &= \square \end{aligned}$$

(10)



$$\begin{aligned} 9 \times 9 &= \square - \square \\ &= \square - \square \\ &= \square \end{aligned}$$